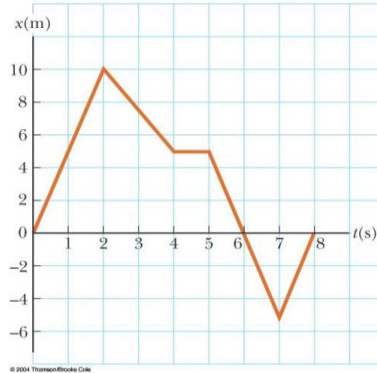


1: Physical Quantity and Measurement

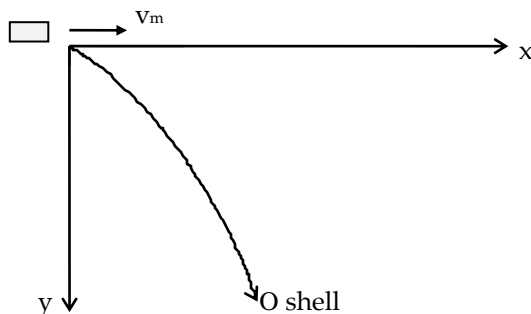
- Newton's law of universal gravitation is represented by $F = \frac{GMm}{r^2}$ where F is the gravitational force exerted by one small object on another, M and m are the masses of the objects, and r is a distance. Force has the SI units $\text{kg}\cdot\text{m}/\text{s}^2$. What are the SI units of the proportionality constant G ?
- A worker is to paint the walls of a square room 8.00 ft high and 12.0 ft along each side. What surface area in square meters much she cover? (1 m = 3.28 ft)
- The volume of a wallet is 8.50 in.³ Convert this value to m³, using the definition 1 in. = 2.54 cm.
- A solid piece of lead has a mass of 23.94 g and a volume of 2.10 cm³. From these data, calculate the density of lead in SI units (kg/m^3).
- An ore loader moves 1 200 tons/h from a mine to the surface. Convert this rate to lb/s, using 1 ton = 2 000 lb.
- How many significant figures are in the following numbers? (a) 78.9 ± 0.2 , (b) 3.788×10^9 , (c) 2.46×10^{-6} , (d) 0.005 3.
- The radius of a solid sphere is measured to be (6.50 ± 0.20) cm, and its mass is measured to be (1.85 ± 0.02) kg. Determine the density of the sphere in kilograms per cubic meter and the uncertainty in the density.
- There are nearly $\pi \times 10^7$ s in one year. Find the percentage error in this approximation, where "percentage error" is defined as
Percentage error = $\frac{|\text{assumed value} - \text{true value}|}{\text{true value}} \times 100\%$
- Two points in the xy plane have Cartesian coordinates (2.00, -4.00) m and (-3.00, 3.00) m. Determine (a) the distance between these points and (b) their polar coordinates.
- Vector **A** has a magnitude of 8.00 units and makes an angle of 45.0° with the positive x axis. Vector **B** also has a magnitude of 8.00 units and is directed along the negative x axis. Using graphical methods, find (a) the vector sum **A** + **B** and (b) the vector difference **A** - **B**.
- Vector **A** has x and y components of -8.70 cm and 15.0 cm, respectively; vector **B** has x and y components of 13.2 cm and -6.60 cm, respectively. If **A** - **B** + 3**C** = 0, what are the components of **C**?
- An airplane starting from airport A flies 300 km east, then 350 km at 30.0° west of north, and then 150 km north to arrive finally at airport B. (a) The next day, another plane flies directly from A to B in a straight line. In what direction should the pilot travel in this direct flight? (b) How far will the pilot travel in this direct flight? Assume there is no wind during these flights.
- Using the definition of the scalar product, find the angles between (a) **A** = $3\hat{\mathbf{i}} - 2\hat{\mathbf{j}}$ and **B** = $4\hat{\mathbf{i}} - 4\hat{\mathbf{j}}$; (b) **A** = $-2\hat{\mathbf{i}} + 4\hat{\mathbf{j}}$ and **B** = $3\hat{\mathbf{i}} - 4\hat{\mathbf{j}} + 2\hat{\mathbf{k}}$; (c) **A** = $\hat{\mathbf{i}} - 2\hat{\mathbf{j}} + 2\hat{\mathbf{k}}$ and **B** = $3\hat{\mathbf{j}} + 4\hat{\mathbf{k}}$.
- Two vectors are given by **A** = $-3\hat{\mathbf{i}} + 7\hat{\mathbf{j}} - 4\hat{\mathbf{k}}$ and **B** = $6\hat{\mathbf{i}} - 10\hat{\mathbf{j}} + 9\hat{\mathbf{k}}$, evaluate the quantities (a) $\cos^{-1}[\mathbf{A} \cdot \mathbf{B}/AB]$ and (b) $\sin^{-1}[|\mathbf{A} \times \mathbf{B}|/AB]$. (c) Which give(s) the angle between the vectors?

2: Kinematics

1. The position versus time for a certain particle moving along the x axis is shown below. Find the average velocity in the time intervals (a) 0 to 2 s, (b) 0 to 4 s, (c) 2 s to 4 s, (d) 4 s to 7 s, (e) 0 to 8 s.



2. A person walks first at a constant speed of 5.00 m/s along a straight line from point A to point B and then back along the line from B to A at a constant speed of 3.00 m/s. What is (a) her average speed over the entire trip? (b) her average velocity over the entire trip?
3. An object moves along the x axis according to the equation $x(t) = (3.00t^2 - 2.00t + 3.00)$ m. Determine (a) the average speed between $t = 2.00$ s and $t = 3.00$ s, (b) the instantaneous speed at $t = 2.00$ s and at $t = 3.00$ s, (c) the average acceleration between $t = 2.00$ s and $t = 3.00$ s, and (d) the instantaneous acceleration at $t = 2.00$ s and $t = 3.00$ s.
4. A jet plane lands with a speed of 100 m/s and can accelerate at a maximum rate of -5.00 m/s² as it comes to rest. (a) From the instant the plane touches the runway, what is the minimum time interval needed before it can come to rest? (b) Can this plane land on a small tropical island airport where the runway is 0.800 km long?
5. A student throws a set of keys vertically upward to her sorority sister, who is in a window 4.00 m above. The keys are caught 1.50 s later by the sister's outstretched hand. (a) With what initial velocity were the keys thrown? (b) What was the velocity of the keys just before they were caught?
6. A baseball is hit so that it travels straight upward after being struck by the bat. A fan observes that it takes 3.00 s for the ball to reach its maximum height. Find (a) its initial velocity and (b) the height it reaches.
7. Figure below shows a howitzer which is used to fire a shell horizontally with a muzzle velocity, $v_m = 40$ m/s from the top of a high cliff.



- After $t = 5.0$ s, find the
- x -component of the shell's velocity;
 - y -component of the shell's velocity;
 - magnitude of the shell's velocity; and
 - direction of the shell's velocity.

3: The Laws of Motion

1. A force \mathbf{F} applied to an object of mass m_1 produces an acceleration of 3.00 m/s^2 . The same force applied to a second object of mass m_2 produces an acceleration of 1.00 m/s^2 . (a) What is the value of the ratio m_1/m_2 ? (b) If m_1 and m_2 are combined, find their acceleration under the action of the force \mathbf{F} .

2. A 3.00-kg object undergoes an acceleration given by $\mathbf{a} = (2.00\hat{\mathbf{i}} + 5.00\hat{\mathbf{j}})\text{m/s}^2$. Find the resultant force acting on it and the magnitude of the resultant force.

3. Three forces, given by $\mathbf{F}_1 = (-2.00\hat{\mathbf{i}} + 2.00\hat{\mathbf{j}})\text{N}$, $\mathbf{F}_2 = (5.00\hat{\mathbf{i}} - 3.00\hat{\mathbf{j}})\text{N}$, and $\mathbf{F}_3 = (-45.0\hat{\mathbf{i}})\text{N}$, act on an object to give it an acceleration of magnitude 3.75 m/s^2 . (a) What is the direction of the acceleration? (b) What is the mass of the object? (c) If the object is initially at rest, what is its speed after 10.0 s ? (d) What are the velocity components of the object after 10.0 s ?

4. Draw a free-body diagram of a block which slides down a frictionless plane having an inclination of $\theta = 15.0^\circ$ (Fig. 1). If the block starts from rest at the top and the length of the incline is 2.00 m , find (a) the acceleration of the block and (b) its speed when it reaches the bottom of the incline.

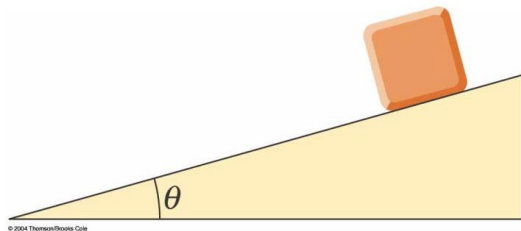


Figure 1

5. A 5.00-kg object placed on a frictionless, horizontal table is connected to a cable that passes over a pulley and then is fastened to a hanging 9.00-kg object, as in Figure 2. Draw free-body diagrams of both objects. Find the acceleration of the two objects and the tension in the string.

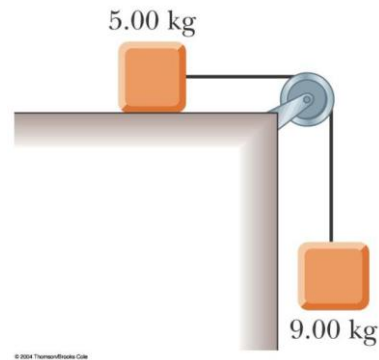


Figure 2

6. A 72.0-kg man stands on a spring scale in an elevator. Starting from rest, the elevator ascends, attaining its maximum speed of 1.20 m/s in 0.800 s . It travels with this constant speed for the next 5.00 s . The elevator then undergoes a uniform acceleration in the negative y direction for 1.50 s and comes to rest. What does the spring scale register (a) before the elevator starts to move? (b) during the first 0.800 s ? (c) while the elevator is traveling at constant speed? (d) during the time it is slowing down?

7. A 3.00-kg block starts from rest at the top of a 30.0° incline and slides a distance of 2.00 m down the incline in 1.50 s . Find (a) the magnitude of the acceleration of the block, (b) the coefficient of kinetic friction between block and plane, (c) the friction force acting on the block, and (d) the speed of the block after it has slid 2.00 m .

4: Torque and Equilibrium

1. A uniform beam of mass m_b and length ℓ supports blocks with masses m_1 and m_2 at two positions, as in Figure 1. The beam rests on two knife edges. By taking torques at point P , for what value of x will the beam be balanced at P such that the normal force at O is zero?

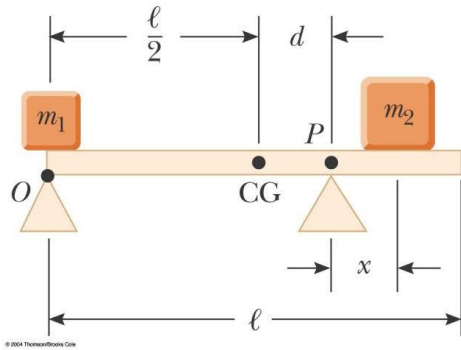


Figure 1

2. A 20.0-kg floodlight in a park is supported at the end of a horizontal beam of negligible mass that is hinged to a pole, as shown in Figure 2. A cable at an angle of 30.0° with the beam helps to support the light. Find (a) the tension in the cable and (b) the horizontal and vertical forces exerted on the beam by the pole.

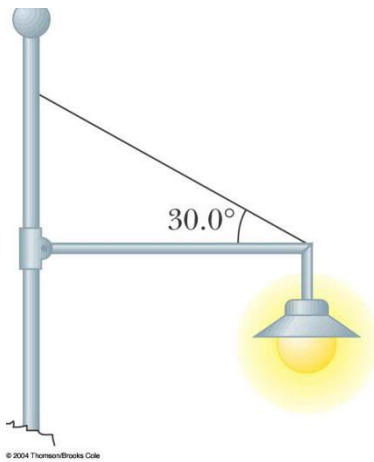


Figure 2

3. A hungry bear weighing 700 N walks out on a beam in an attempt to retrieve a basket of food hanging at the end of the beam (Fig. 3). The beam is uniform, weighs 200 N, and is 6.00 m long; the basket weighs 80.0 N. (a) Draw a free-body diagram for the beam. (b) When the bear is at $x = 1.00$ m, find

the tension in the wire and the components of the force exerted by the wall on the left end of the beam. (c) **What If?** If the wire can withstand a maximum tension of 900 N, what is the maximum distance the bear can walk before the wire breaks?

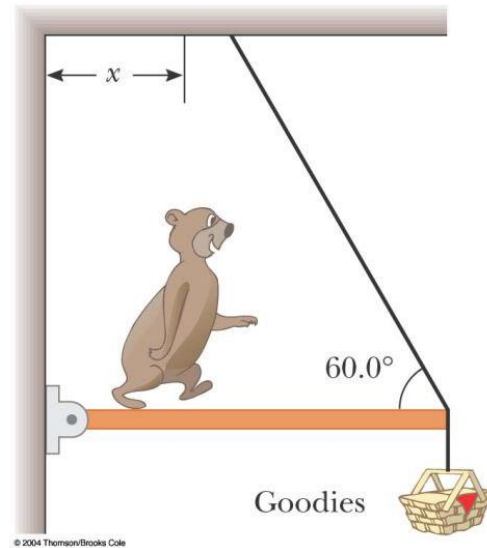


Figure 3

4. A uniform sign of weight F_g and width $2L$ hangs from a light, horizontal beam, hinged at the wall and supported by a cable (Fig. 4). Determine (a) the tension in the cable and (b) the components of the reaction force exerted by the wall on the beam, in terms of F_g , d , L , and θ .

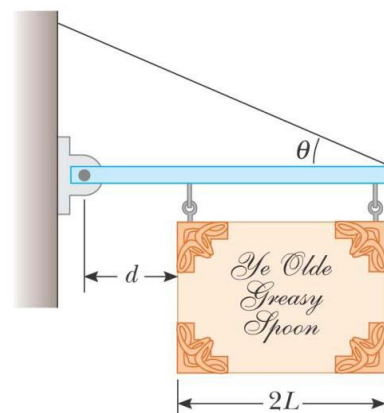


Figure 4

5: Kinetics – Work, Energy and Power

1. A shopper in a supermarket pushes a cart with a force of 35.0 N directed at an angle of 25.0° downward from the horizontal. Find the work done by the shopper on the cart as he moves down an aisle 50.0 m long.

2. A particle is subject to a force F_x that varies with position as in Figure P7.13. Find the work done by the force on the particle as it moves (a) from $x = 0$ to $x = 5.00$ m, (b) from $x = 5.00$ m to $x = 10.0$ m, and (c) from $x = 10.0$ m to $x = 15.0$ m. (d) What is the total work done by the force over the distance $x = 0$ to $x = 15.0$ m?

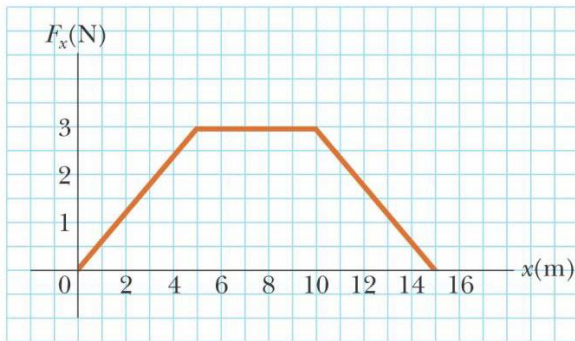


Figure P7.13

3. An archer pulls her bowstring back 0.400 m by exerting a force that increases uniformly from zero to 230 N. (a) What is the equivalent spring constant of the bow? (b) How much work does the archer do in pulling the bow?

4. A 0.600-kg particle has a speed of 2.00 m/s at point A and kinetic energy of 7.50 J at point B. What is (a) its kinetic energy at A? (b) its speed at B? (c) the total work done on the particle as it moves from A to B?

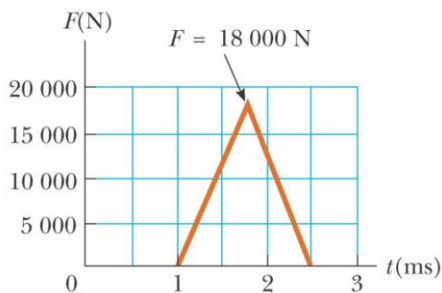
5. You can think of the work-kinetic energy theorem as a second theory of motion, parallel to Newton's laws in describing how outside influences affect the motion of an object. In this problem, solve parts (a) and (b) separately from parts (c) and (d) to compare the predictions of the two theories. In a rifle barrel, a 15.0-g bullet is accelerated from rest to a speed of 780 m/s. (a) Find the work that is done on the bullet. (b) If the rifle barrel is 72.0 cm long, find the magnitude of the average total force that acted on it, as $F = W/(\Delta r \cos \theta)$. (c) Find the constant acceleration of a bullet that starts from rest and gains a speed of 780 m/s over a distance of 72.0 cm. (d) If the bullet has mass 15.0 g, find the total force that acted on it as $\Sigma F = ma$.

6. A skier of mass 70.0 kg is pulled up a slope by a motor-driven cable. (a) How much work is required to pull him a distance of 60.0 m up a 30.0° slope (assumed frictionless) at a constant speed of 2.00 m/s? (b) A motor of what power is required to perform this task?

7. A 650-kg elevator starts from rest. It moves upward for 3.00 s with constant acceleration until it reaches its cruising speed of 1.75 m/s. (a) What is the average power of the elevator motor during this period? (b) How does this power compare with the motor power when the elevator moves at its cruising speed?

6: Dynamics - Linear Momentum and Collisions

1. A 0.100-kg ball is thrown straight up into the air with an initial speed of 15.0 m/s. Find the momentum of the ball (a) at its maximum height and (b) halfway up to its maximum height.
2. An estimated force-time curve for a baseball struck by a bat is shown in figure below. From this curve, determine (a) the impulse delivered to the ball, (b) the average force exerted on the ball, and (c) the peak force exerted on the ball.



3. A ball of mass 0.150 kg is dropped from rest from a height of 1.25 m. It rebounds from the floor to reach a height of 0.960 m. What impulse was given to the ball by the floor?
4. In a slow-pitch softball game, a 0.200-kg softball crosses the plate at 15.0 m/s at an angle of 45.0° below the horizontal. The batter hits the ball toward center field, giving it a velocity of 40.0 m/s at 30.0° above the horizontal. (a) Determine the impulse delivered to the ball. (b) If the force on the ball increases linearly for 4.00 ms, holds constant for 20.0 ms, and then decreases to zero linearly in another 4.00 ms, what is the maximum force on the ball?
5. A 10.0-g bullet is fired into a stationary block of wood ($m = 5.00$ kg). The relative motion of the bullet stops inside the block. The speed of the bullet-plus-wood combination immediately after the collision is 0.600 m/s. What was the original speed of the bullet?
6. A 90.0-kg fullback running east with a speed of 5.00 m/s is tackled by a 95.0-kg opponent running north with a speed of 3.00 m/s. If the collision is perfectly inelastic, (a) calculate the speed and direction of the players just after the tackle and (b) determine the mechanical energy lost as a result of the collision. Account for the missing energy.
7. A billiard ball moving at 5.00 m/s strikes a stationary ball of the same mass. After the collision, the first ball moves at 4.33 m/s, at an angle of 30.0° with respect to the original line of motion. Assuming an elastic collision (and ignoring friction and rotational motion), find the struck ball's velocity after the collision.

7: Fluid Mechanics

1. A 50.0-kg woman balances on one heel of a pair of high-heeled shoes. If the heel is circular and has a radius of 0.500 cm, what pressure does she exert on the floor?
2. The four tires of an automobile are inflated to a gauge pressure of 200 kPa. Each tire has an area of 0.024 0 m² in contact with the ground. Determine the weight of the automobile.
3. (a) Calculate the absolute pressure at an ocean depth of 1 000 m. Assume the density of seawater is 1 024 kg/m³ and that the air above exerts a pressure of 101.3 kPa. (b) At this depth, what force must the frame around a circular submarine porthole having a diameter of 30.0 cm exert to counterbalance the force exerted by the water?
4. A swimming pool has dimensions 30.0 m × 10.0 m and a flat bottom. When the pool is filled to a depth of 2.00 m with fresh water, what is the force caused by the water on the bottom? On each end? On each side?
5. A cube of wood having an edge dimension of 20.0 cm and a density of 650 kg/m³ floats on water. (a) What is the distance from the horizontal top surface of the cube to the water level? (b) How much lead weight has to be placed on top of the cube so that its top is just level with the water?
6. A spherical aluminum ball of mass 1.26 kg contains an empty spherical cavity that is concentric with the ball. The ball just barely floats in water. Calculate (a) the outer radius of the ball and (b) the radius of the cavity.
7. A plastic sphere floats in water with 50.0 percent of its volume submerged. This same sphere floats in glycerin with 40.0 percent of its volume submerged. Determine the densities of the glycerin and the sphere.
8. A helium-filled balloon is tied to a 2.00-m-long, 0.050 0-kg uniform string. The balloon is spherical with a radius of 0.400 m. When released, it lifts a length h of string and then remains in equilibrium, as in Figure 1. Determine the value of h . The envelope of the balloon has mass 0.250 kg.

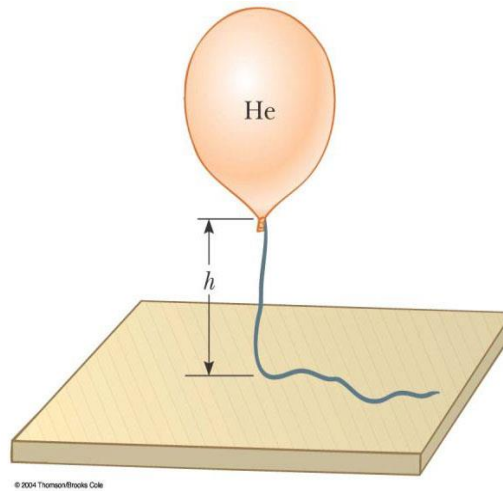


Figure 1

8: Electrostatic

P1. In the Bohr theory of the hydrogen atom, an electron moves in a circular orbit about a proton, where the radius of the orbit is 0.529×10^{-10} m. (a) Find the electric force between the two. (b) If this force causes the centripetal acceleration of the electron, what is the speed of the electron?

P2. Consider four charges placed at the corners of a square with sides of length 1.25 m as shown in Figure 1. What is the magnitude of the electric force on q_4 resulting from the electric force from the remaining three charges?

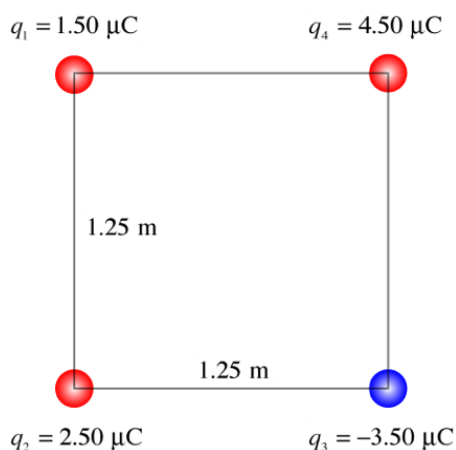


Figure 1

P3. An object having a net charge of $24.0 \mu\text{C}$ is placed in a uniform electric field of 610 N/C directed vertically. What is the mass of this object if it "floats" in the field?

P4. Three point charges are arranged as shown in Figure 2. (a) Find the vector electric field that the 6.00-nC and -3.00-nC charges together create at the origin. (b) Find the vector force on the 5.00-nC charge.

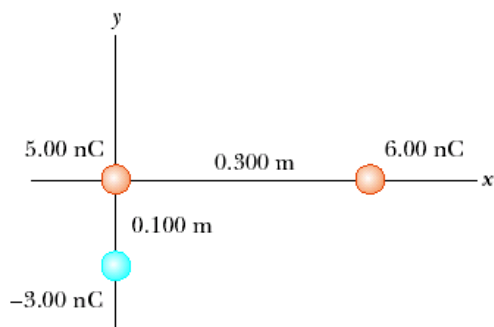


Figure 2

P5. An electron moving parallel to the x axis has an initial speed of 3.70×10^6 m/s at the origin. Its speed is reduced to 1.40×10^5 m/s at the point $x = 2.00$ cm. Calculate the potential difference between the origin and that point. Which point is at the higher potential?

P6. The three charges in Figure 3 are at the vertices of an isosceles triangle. Calculate the electric potential at the midpoint of the base, taking $q = 7.00 \mu\text{C}$.

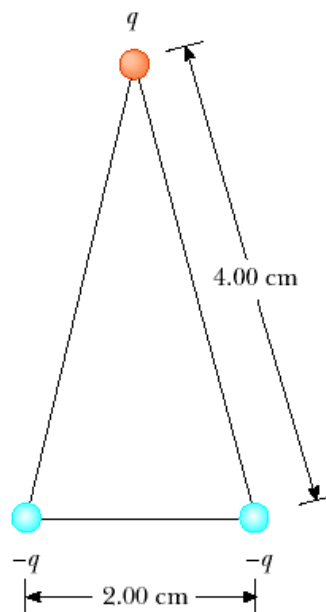


Figure 3

P6. The three charges in Figure 3 are at the vertices of an isosceles triangle. Calculate the electric potential at the midpoint of the base, taking $q = 7.00 \mu\text{C}$.

9: Magnetic Fields and Source of Magnetic Fields

- P1. An electron moving along the positive x axis perpendicular to a magnetic field experiences a magnetic deflection in the negative y direction. What is the direction of the magnetic field?
- P2. A proton moving at 4.00×10^6 m/s through a magnetic field of 1.70 T experiences a magnetic force of magnitude 8.20×10^{-13} N. What is the angle between the proton's velocity and the field?
- P3. A wire carries a steady current of 2.40 A. A straight section of the wire is 0.750 m long and lies along the x axis within a uniform magnetic field, $\mathbf{B} = 1.60 \hat{\mathbf{k}}$ T. If the current is in the $+x$ direction, what is the magnetic force on the section of wire?
- P4. A proton moving freely in a circular path perpendicular to a constant magnetic field takes $1.00 \mu\text{s}$ to complete one revolution. Determine the magnitude of the magnetic field.
- P5. Two very long, straight, parallel wires carry currents that are directed perpendicular to the page, as in Figure 1. Wire 1 carries a current I_1 into the page (in the $-z$ direction) and passes through the x axis at $x = +a$. Wire 2 passes through the x axis at $x = -2a$ and carries an unknown current I_2 . The total magnetic field at the origin due to the current-carrying wires has the magnitude $2\mu_0 I_1 / (2\pi a)$. The current I_2 can have either of two possible values. (a) Find the value of I_2 with the smaller magnitude, stating it in terms of I_1 and giving its direction. (b) Find the other possible value of I_2 .

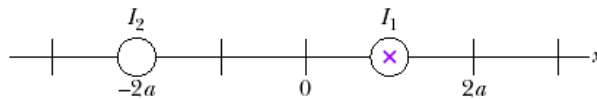


Figure 1

- P6. Determine the magnetic field (in terms of I , a , and d) at the origin due to the current loop in Figure 2.

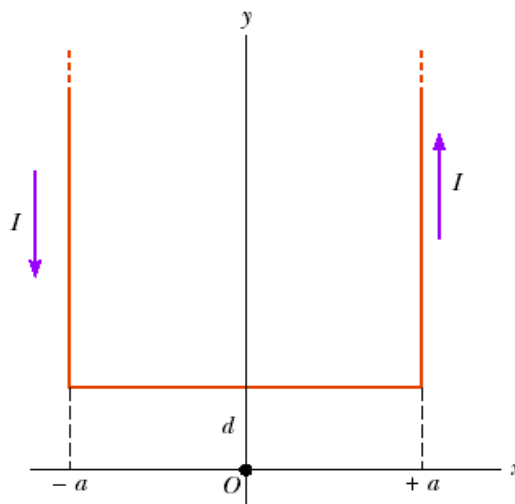


Figure 2

- P7. Two long, parallel conductors carry currents $I_1 = 3.00\text{ A}$ and $I_2 = 3.00\text{ A}$, both directed into the page in Figure 3. Determine the magnitude and direction of the resultant magnetic field at P .

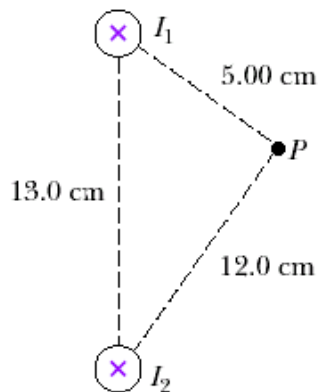


Figure 3

- P8. Two long, parallel wires are attracted to each other by a force per unit length of $320\ \mu\text{N/m}$ when they are separated by a vertical distance of 0.500 m . The current in the upper wire is 20.0 A to the right. Determine the location of the line in the plane of the two wires along which the total magnetic field is zero.

10: Electromagnetic Induction

- P1. A 25-turn circular coil of wire has diameter 1.00 m. It is placed with its axis along the direction of the Earth's magnetic field of $50.0 \mu\text{T}$, and then in 0.200 s it is flipped 180° . An average emf of what magnitude is generated in the coil?
- P2. A coil formed by wrapping 50 turns of wire in the shape of a square is positioned in a magnetic field so that the normal to the plane of the coil makes an angle of 30.0° with the direction of the field. When the magnetic field is increased uniformly from $200 \mu\text{T}$ to $600 \mu\text{T}$ in 0.400 s, an emf of magnitude 80.0 mV is induced in the coil. What is the total length of the wire?
- P3. An automobile has a vertical radio antenna 1.20 m long. The automobile travels at 65.0 km/h on a horizontal road where the Earth's magnetic field is $50.0 \mu\text{T}$ directed toward the north and downward at an angle of 65.0° below the horizontal. (a) Specify the direction that the automobile should move in order to generate the maximum motional emf in the antenna, with the top of the antenna positive relative to the bottom. (b) Calculate the magnitude of this induced emf.
- P4. Use Lenz's law to answer the following questions concerning the direction of induced currents. (a) What is the direction of the induced current in resistor R in Figure 1a when the bar magnet is moved to the left? (b) What is the direction of the current induced in the resistor R immediately after the switch S in Figure 1b is closed? (c) What is the direction of the induced current in R when the current I in Figure 1c decreases rapidly to zero? (d) A copper bar is moved to the right while its axis is maintained in a direction perpendicular to a magnetic field, as shown in Figure 1d. If the top of the bar becomes positive relative to the bottom, what is the direction of the magnetic field?

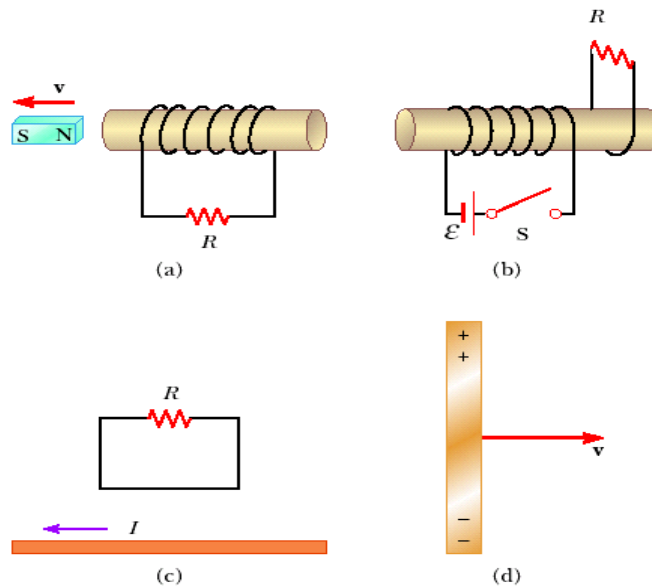


Figure 1

- P5. A rectangular coil with resistance R has N turns, each of length ℓ and width w as shown in Figure 2. The coil moves into a uniform magnetic field \mathbf{B} with constant velocity \mathbf{v} . What are the magnitude and direction of the total magnetic force on the coil (a) as it enters the magnetic field, (b) as it moves within the field, and (c) as it leaves the field?

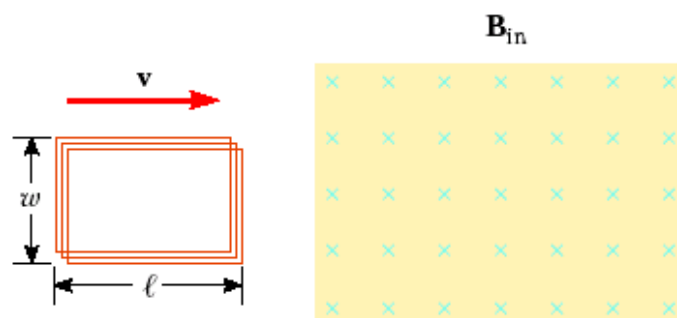


Figure 2

- P6. Find the inductance of a uniformly wound solenoid having N turns and length l . Assume that l is much longer than the radius of the windings and that the core of the solenoid is air.
- P7. (a) Calculate the inductance of an air-core solenoid containing 300 turns if the length of the solenoid is 25.0 cm and its cross-sectional area is 4.00 cm^2 . (b) Calculate the self-induced emf in the solenoid if the current through it is decreasing at the rate of 50.0 A/s .
- P8. A transformer has 500 turns of the primary winding and 10 turns of the secondary winding.
- (a) Determine the secondary voltage if the secondary circuit is open and the primary voltage is 120 V.
- (b) Determine the current in the primary and secondary winding, given that the secondary winding is connected to a resistance load 15Ω ?